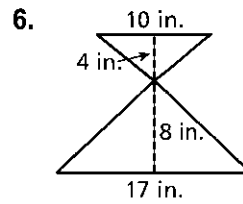
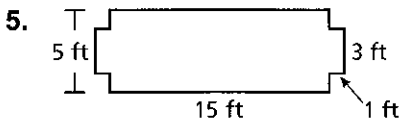
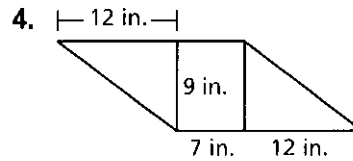
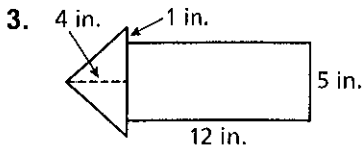
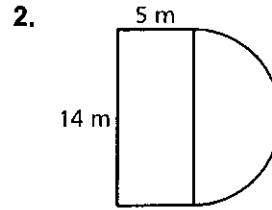
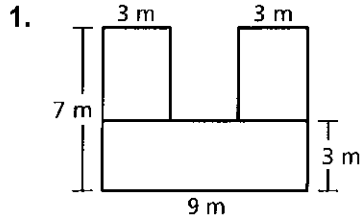
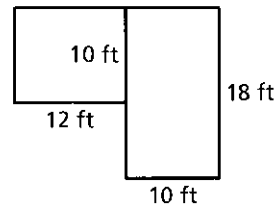


**Chapter 8** Fair Game Review

Find the area of the figure.

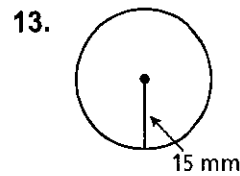
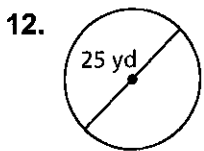
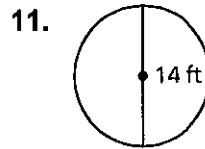
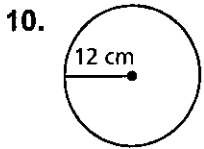
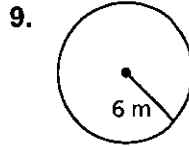
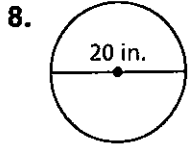


7. You are carpeting 2 rooms of your house.  
The carpet costs \$1.48 per square foot.  
How much does it cost to carpet the rooms?



**Chapter 8** Fair Game Review (continued)

Find the area of the circle.



14. Find the area of the shaded region.

